

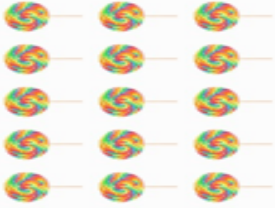



Year 1 Homework
23rd April 2026

<p style="text-align: center;"><u>Maths</u> Due in Wednesday</p>	<p>Must: Complete the table. The first one has been done for you. Should: Read each sentence and draw circles around the different objects to group them. Then, answer the questions. Could: Read the question and count in 2s, 5s or 10s to find the answer. Write it in the box.</p>
<p style="text-align: center;"><u>Arithmetic Test</u> Tuesday</p>	<p>We will be focusing doubling within 20 this week. Example questions: 3 + 3 = _____ 10 + 10 = _____ 5 + 5 _____</p> <p>Please make sure your child's reading diary is brought to school so we can make can write the score.</p>
<p style="text-align: center;"><u>Spelling Test</u> Thursday</p>	<p>Each week, you will receive 6 or 10 words to practice. Please use the look, say, cover, write, check method to learn your words.</p> <p>This week will be Year 1 Key Words.</p> <p>10 words: Monday, Tuesday, Wednesday, Thursday, Friday, Saturday, Sunday, there, here, said 6 words: they, went, this, here, my, me</p> <p>Please make sure your child's reading diary is brought to school so we can write the score.</p>
<p style="text-align: center;"><u>English</u> Due in Monday</p>	<p>Must: Read the words. If the word needs a capital letter, write it in the box. If it doesn't, tick the box instead. Should: Choose 2 colours. Read the words and colour them based on if they are real or nonsense. Could: Complete the sentences about the picture. You can use the words to help you. Then, write your own sentence about the picture.</p>

Maths

Must: Complete the table. The first one has been done for you.

Array	Description - Rows	Description - Column	Totals
	2 rows 5 cookies in each row	5 columns 2 cookies in each column	5+5=10 2+2+2+2+2=10
	___ rows ___ doughnuts in each row	___ columns ___ doughnuts in each column	
	___ rows ___ lollies in each row	___ columns ___ lollies in each columns	
	___ rows ___ cupcakes in each row	___ columns ___ cupcakes in each column	
	5 rows 3 sweets in each row	3 columns 5 sweets in each column	

Should: Read each sentence and draw circles around the different objects to group them. Then, answer the questions.



1) Group the marbles into groups of 2. Then, complete the sentence.

There are groups of .



2) 5 dice fit in a box. How many boxes do we need for 30 dice?

boxes



3) 10 balls fit in a bag. How many bags do we need for 40 balls?

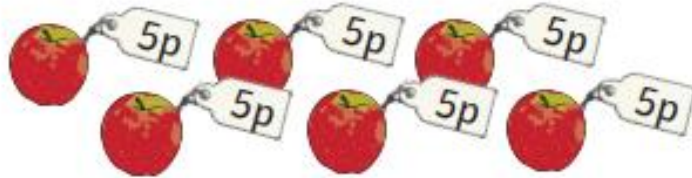
bags

Could: Read the question and count in 2s, 5s or 10s to find the answer.
Write it in the box.


- 1 How much do three pineapples cost?



- 2 How much do six apples cost?



- 3 How much do five oranges cost?



- 4 How much do eight pineapples cost?



- 5 How much do seven oranges cost?



- 6 How much do four apples cost?



English

Must: Read the words. If the word needs a capital letter, write it in the box. If it doesn't, tick the box instead.

<p>table</p>  <input type="text"/>	<p>sydney</p>  <input type="text"/>	<p>fruit</p>  <input type="text"/>
<p>dog</p>  <input type="text"/>	<p>melissa</p>  <input type="text"/>	<p>humpty dumpty</p>  <input type="text"/>
<p>hot chips</p>  <input type="text"/>	<p>australia</p>  <input type="text"/>	<p>horse</p>  <input type="text"/>
<p>flowers</p>  <input type="text"/>	<p>december</p>  <input type="text"/>	<p>earth</p>  <input type="text"/>
<p>crayons</p>  <input type="text"/>	<p>lunch</p>  <input type="text"/>	<p>mrs hogg</p>  <input type="text"/>

Should: Choose 2 colours. Read the words and colour them based on if they are real or nonsense.

Key

Real Words

Nonsense Words



paul	gaze	frew	raub
blied	vloe	glide	srake
chay	zirst	bone	splibe
chew	pound	zoy	jume
issue	whip	lesue	gloud

Could: Complete the sentences about the picture. You can use the words to help you. Then, write your own sentence about the picture.



boys friends hats jumpers steps

Here are _____.

They are sitting _____.

They are wearing _____.

Now, write your own sentence about this picture.

