

Thursday 25th September 2025 Year Three Homework

Maths	This week we have learning to compare and order numbers to 1000.
Arithmetic Test- Tuesday	Our test will focus on the 10 times tables. I will ask the children questions out of order from 1×10 to 10×5 .
Spelling Test- Thursday	This week we will be focussing on common exception words which contain a split digraph.
English	This week we have continued our learning about different types of sentences- questions, statements, commands and exclamations.

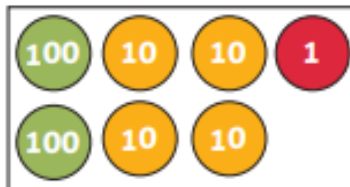
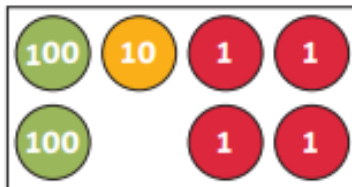
Year Three Maths Homework- Due on Wednesday

Must-

Compare Numbers to 1000



1) Complete the number statement to compare the numbers represented in each pair.



a) _____ is greater than _____ .



b) _____ is less than _____ .

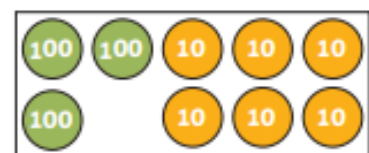
2) Circle the greater number in each pair.

a)

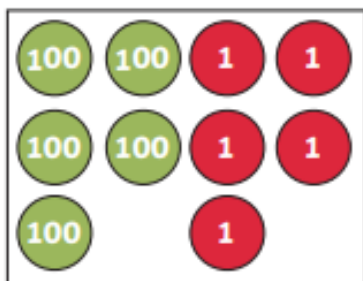
H	T	O
8	3	0

eight hundred and three

b) 3 hundreds and 6 ones



3) Draw place value counters to make the statement correct.



<



4) Write the correct <, > or = symbol to compare the numbers.

a) 773 377

c) 899 1000

b) 126 100 + 20 + 6




Could

Ordering 3-Digit Numbers



1)

a) Write the numbers shown in numerals.



b) Now, order the numbers from smallest to greatest.

smallest

greatest

2) Order the numbers using the place value charts to help.

a)

H	T	O	H	T	O	H	T	O	H	T	O	H	T	O
2	2	0	1	9	0	5	4	0	3	1	0	6	3	0

smallest

greatest

b)

H	T	O	H	T	O	H	T	O	H	T	O	H	T	O
4	7	0	8	9	0	9	1	0	4	6	0	9	8	0

greatest

smallest

Year Three English Homework- Due on Monday

Must

1. Draw a line to match the sentences to the sentence type.

How lucky we are to see a
hedgehog!

statement

Where would you like to go for your
birthday?

question

Tell me how you did that
magic trick!

exclamation

The giraffe is the tallest animal in
the world.

command

2. Choose one animal from the pictures and write a statement sentence about it.



Could

Use one of these question words to complete the question sentences.

Who

What

Where

When

Why

_____ is the grass green?

_____ have all the apples gone?

_____ is it lunchtime?

_____ time is it now?

_____ has left the pencils in a mess?

8. Write 'what' or 'how' to complete these exclamation sentences.

_____ big teeth you have!

_____ wonderful this drawing is!

_____ hard you have worked today!

_____ a friendly cat you are!

9. Look at this picture and write two exclamation sentences (don't forget the exclamation mark!)





Examples: How tall that tree is! What a lot of flowers!

What: _____

How: _____

Spellings- Thursday 25th September 2025

	look 	say 	cove r	write	check
arrive					
believe					
complete					
describe					
exercise					
extreme					
guide					
separate					
suppose					
surprise					

Arithmetic Test- Tuesday 23rd September- 10 times tables.

10 times table

$1 \times 10 = 10$
 $2 \times 10 = 20$
 $3 \times 10 = 30$
 $4 \times 10 = 40$
 $5 \times 10 = 50$
 $6 \times 10 = 60$
 $7 \times 10 = 70$
 $8 \times 10 = 80$
 $9 \times 10 = 90$
 $10 \times 10 = 100$
 $11 \times 10 = 110$
 $12 \times 10 = 120$
