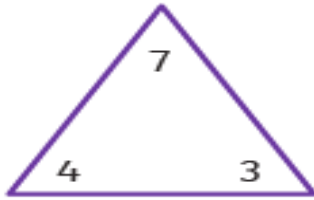


Year 1 Homework
4th December 2025

<p style="text-align: center;"><u>Maths</u> Due in Wednesday</p>	<p>Look at the three numbers and write the fact families.</p> <p>Challenge: Solve the equations.</p>
<p style="text-align: center;"><u>Arithmetic Test</u> Tuesday</p>	<p>We will be doing single digit subtraction. Some examples of this could be (there will be others like this on the test):</p> <p>5-2=____</p> <p>____=3-1</p> <p>9-9=____</p> <p>____=4-3</p> <p>We will be using numbers to 10.</p> <p>Please make sure your child's reading diary is brought to school so we can write the score.</p>
<p style="text-align: center;"><u>Spelling Test</u> Thursday</p>	<p>Each week, you will receive 6 words to practice. Please use the look, say, cover, write, check method to learn your words.</p> <p>This week will be the sound spelt n before g 'ng' and the sound spelt n before k 'nk'.</p> <p>Bank, think, honk, sunk, sing, long</p> <p>Please make sure your child's reading diary is brought to school so we can write the score.</p>
<p style="text-align: center;"><u>English</u> Due in Monday</p>	<p>We learned what a noun is: a person, animal, place or object. Colour the nouns in the chart according to the code.</p> <p>Now, read the sentences and circle the noun. There may be more than one! You may need help to read the sentences.</p>

Maths

Look at the three numbers and write the addition and subtraction to make the fact families.

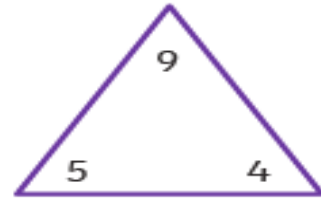


$$\square + \square = \square$$

$$\square + \square = \square$$

$$\square - \square = \square$$

$$\square - \square = \square$$

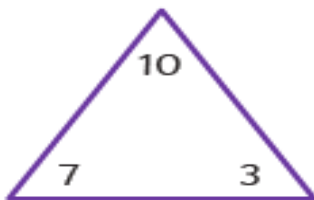


$$\square + \square = \square$$

$$\square + \square = \square$$

$$\square - \square = \square$$

$$\square - \square = \square$$

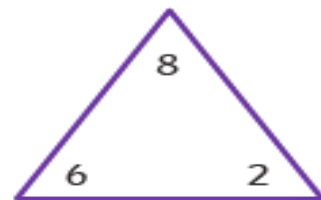


$$\square + \square = \square$$

$$\square + \square = \square$$

$$\square - \square = \square$$

$$\square - \square = \square$$



$$\square + \square = \square$$

$$\square + \square = \square$$

$$\square - \square = \square$$

$$\square - \square = \square$$

Challenge: Solve the equations.

1. $3 + 2 = \underline{\quad} + 1$





2. $4 + 1 = 2 + \underline{\quad}$

3. $6 + \underline{\quad} = 5 + 3$

4. $\underline{\quad} + 4 = 7 + 1$

English

We learned about what a noun is: a person, animal, place or object.
Colour the nouns in the chart according to the code.

Person	Place	Thing	Animal	
				
kitten	yard	sister	snake	baby
child	paper	store	cake	book
zoo	lizard	milk	teacher	school

Now, read the sentences and circle the noun. There may be more than one! You may need help to read the sentences.



The rain was cold and wet.



I threw the snowball at my friend.



The warm drink was tasty.



The boy wrapped himself up in lots of clothes.



My gloves are pink and colourful.