

Thursday 19th March 2026 Year Three Homework

Maths	We have been continuing our learning of fractions have been working out fractions on a number line and a scale.
Arithmetic Test- Tuesday	Next week we the arithmetic test will be missing number problems. For example $234 + ? = 347$ $? - 637 = 291$
Spelling Test- Thursday	Our spelling test next week will be a revision of the taught spelling rules this term. I will choose 10 words from the spelling words for the test.
English	This week we have been learning about prepositions for time, place and clause.

Year Three Maths Homework- Due on Wednesday

Must-

Fractions on a Number Line



1) Complete the sentences for each number line.



The number line has been divided into ____ equal parts.

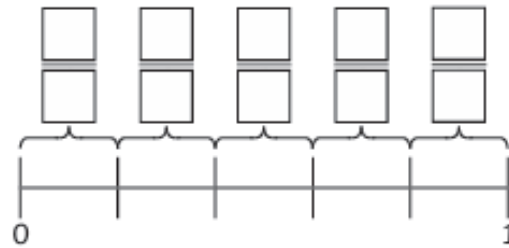
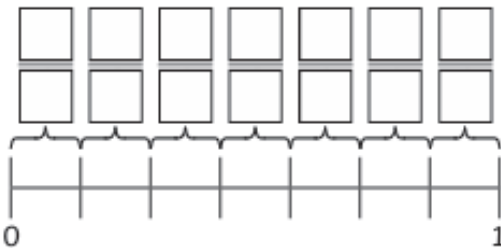
Each part represents $\frac{\square}{\square}$.




The number line has been divided into ____ equal parts.

Each part represents $\frac{\square}{\square}$.

2) Fill in the missing fractions on each number line.



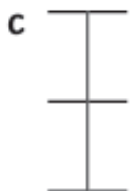
3) Match the number line to the fraction that represents each interval.



$\frac{1}{4}$



$\frac{1}{2}$



$\frac{1}{3}$




$\frac{1}{5}$





Could


Fractions and Scales





1) What fraction of each shape is shaded?


a) 


b) 

c) 


d) 


e) 


f) 

g) 


2) What fraction of a metre is covered on each metre stick?

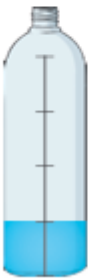
a) 


b) 


c) 


3) Each bottle has a capacity of 1 litre. What fraction of a litre of water is in each bottle?

a) 

b) 

c) 

d) 



or Three English Homework- Due on Monday

Ye

Must

Prepositional Phrases

4. Match the prepositional phrases to the correct sentence starters.

The little girl ran

behind the shed.

The monkey climbed

across the park.

The robber hid

off the branch.



VF
HW/Ext

5. Which prepositional phrases would fit into both the sentences below.

The cat squeezed _____.

Robert was sitting _____.

after the dog

following the
lady

between the
two girls



VF
HW/Ext

6. Unscramble the words to create a sentence that includes a prepositional phrase.

the

the

through

motorway

built

hillside.

They



AR

Could



Preposition Types

I can use prepositions for time, place and cause.



1. Sort the prepositions into **place**, **time** and **cause**.

towards	over	up	across	for
at 1 o'clock	above	on	beside	inside
in the winter	under	in	near	on Saturday
because of	below	at	down	at the weekend

Hint: some prepositions might fit in more than one group!

Time	Place	Cause

Spellings- Thursday 12th March 2026

SUPERSONIC Spelling Stars

My Termly Spellings

CEW /s/ sound using /c/	/s/ sound using /sc/ spelling	/ae/ sound using /ey/ spelling	CEW Doubles	/ae/ sound using /ei/ spelling	/ae/ sound using /eigh/ spelling	CEW /ee/ sound using /e/ spelling
bicycle	adolescent	conveyor	address	abseil	eight	because
centre	ascend	disobey	appear	beige	eighteen	behind
century	crescent	grey	different	rein	eighty	believe
certain	descend	hey	difficult	reindeer	freight	decide
circle	discipline	obey	disappear	reins	neigh	describe
decide	fascinate	prey	grammar	sheikh	neighbour	even
experience	muscle	survey	opposite	vein	sleigh	recent
medicine	scent	surveyor	possible	veins	weigh	remember
notice	science	they	possess	unveil	weight	remind
sentence	scientist	they	suppose	veil	weightless	sequin
